

KAWEMPE MODERN P/S

P.7 PRE-PLE SET THREE

SOCIAL STUDIES TERM III-2022

Time : 2:15 minutes

Candidate's name: Signature

Index No

DO NOT OPEN THIS BOOKLET UNTIL YOU ARE TOLD TO DO SO
Read the following instructions carefully.

| SECTION | MARKS |
|---------|-------|
| A | |
| B | |
| T | |

1. The paper has two sections: A and B.
2. Answer ALL questions. All answers to both sections A and B must be written in the spaces provided.
3. All answers must be written using a blue ball point pen or ink.
Diagrams should be drawn in pencil.
4. No calculators are allowed in the examination room.
5. Unnecessary changes of work may lead to loss of marks.
6. Any handwriting that cannot be easily read may lead to loss of marks.

SECTION A: 40 MARKS

1. What title is given to the head of security in a district?

2. Mention the use of a barometer at a weather station.

3. How did Arabs promote farming in East Africa?

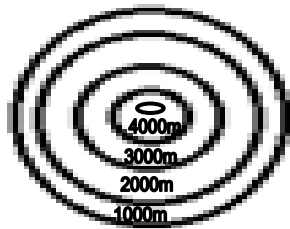
4. Name any one river that forms a watershed in Uganda.

5. Why should farmers harvest their crops during the dry season?

6. Apart from using elections, state any other one way of getting leaders.

7. How is Katanga province economically important to the economy of the Democratic Republic of Congo(DRC)?

8. Mention any one way poverty affects people's way of life.



9. What does the symbol above represent on a map?

10. Write in full the common market that brings together all the countries of East Africa.

11. Why is it important to have rules and regulations at home?

12. Why is the government of Uganda encouraging foreign investors to start business in the country?

13. How are the Fulani of Nigeria similar to Turkana of Kenya in terms of occupation?

14. How can we get information about the past?

15. Mention any one role played by Dr. David Livingstone in the abolition of slave trade.

16. What type of breeze is shown in the diagram below?



17. Name the mineral that was discovered on the shores of Lake Albert.

18. Why was the Suz canal constructed?

19. Give any one way a farmer benefits from a commercial bank.

20. How was formal education important during the struggle for Africa's independence?

21. State any one advantage of mixed farming.

22. Why is Patrice Lumumba still remembered in the history of Africa?

23. Name the type of wood obtained from natural forests.

24. Mention any one way early man obtained food.

25. How did Long Distance Trade lead to the demand?

26. Write down any one social contribution of the Bacwezi.

27. How does vegetation help in controlling soil erosion?

28. State any one method that the government can use to get the rate of population growth.
-
29. Name the multi-purpose river project built in E. Africa.
-
30. Give any one factor that made Africa's resistance to be easily defeated by the colonial government.
-
31. State any one reason why it is important to have a school fence.
-
32. Mention any one way good hotels and lodges promote tourism in the country.
-
33. Which African nationalist helped to unite Zanzibar and Tanganyika to form Tanzania?
-
34. How were the Monsoon Winds helpful to the Arab traders who came to East Africa?
-
35. How were inselbergs formed?
-

For questions 36 – 40 answer either Christianity or Islam but not both

36. **Either:** According to the Bible, who was instructed to build the Ark?
-
- Or:** According to the Qur'an, who was instructed to build the Ark?
-
37. **Either:** Why do Christians visit Namugongo on 3rd June every year?
-
- Or:** Why do Muslims visit Mecca?
-
38. **Either:** Give any one reason why Christians are encouraged to repent after sinning.
-
- Or:** Give any one reason why Muslims are encouraged to repent after sinning.
-
39. **Either:** Mention the first commandment according to Christianity.
-

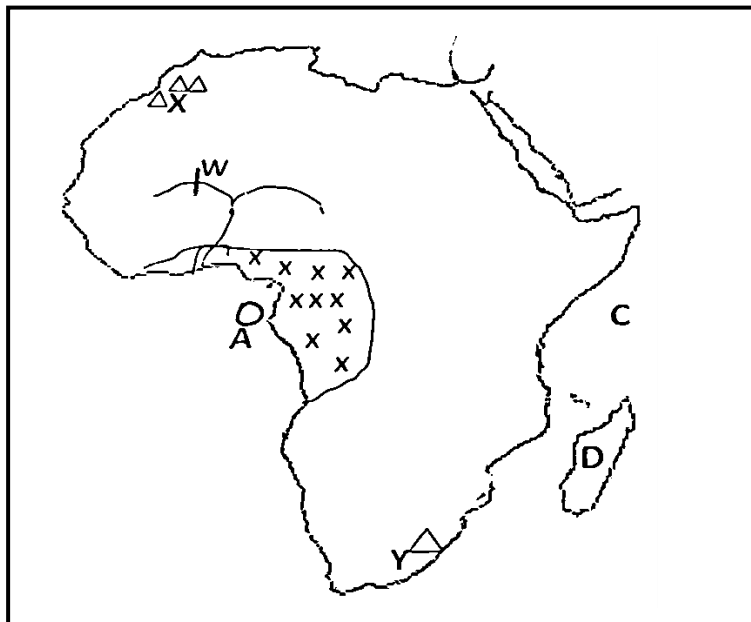
Or: Mention the first pillar according to Islam.

40. **Either:** State any one way Christians show respect to God during prayer.

Or: State any one way Muslims show respect to Allah during prayer.

SECTION B

41. **Study the map of Africa below and use it to answer the questions that follow.**



a) Describe the type of climate in the shaded area xxx.

b) Name the Island country marked letter A.

c) How are mountains labelled X and Y different in terms of formation?

d) Name the multi-purpose river project marked W on river Niger.

42. a) What type of transport is suitable for transporting breakable goods like glass over long distances?

b) Mention any one common means of transport used in the type of transport you have mentioned in (a) above.

c) State any one reason why the type of transport above is not well developed in East Africa.

43. a) Name the first European explorer to cross through the Maasai Land.

b) Write down any two problems faced by European explorers in East Africa.

i) _____

ii) _____

c) How did exploration work speed up the colonization process of African states?

44. a) Name the organ of government which approves the National budget in Uganda.

b) Apart from approving the National budget, mention any other two duties of the organ named above in (44.a)

i) _____

ii) _____

c) Give any one major reason for holding by-elections in Uganda.

45. Kato earns a monthly salary of shs. 960, 000 and spends as follows

House rent = shs. 200,000/=

Transport = shs. 300,000/=

Food = shs. 340,000/=

Medical = shs. 120,000/=

Clothes = shs. 100,000/=

a) What is Kato's monthly expenditure?

b) Name the type of budget Kato has.

c) State any two advantages of making a budget before spending money.

i) _____

ii) _____

46. a) Give any two social reasons why Europeans colonized Africa.
i) _____
ii) _____
- b) Give two reasons why assimilation policy was replaced in the French colonies.
i) _____
ii) _____
47. a) What term is used to mean the increase in number of people living in an area?

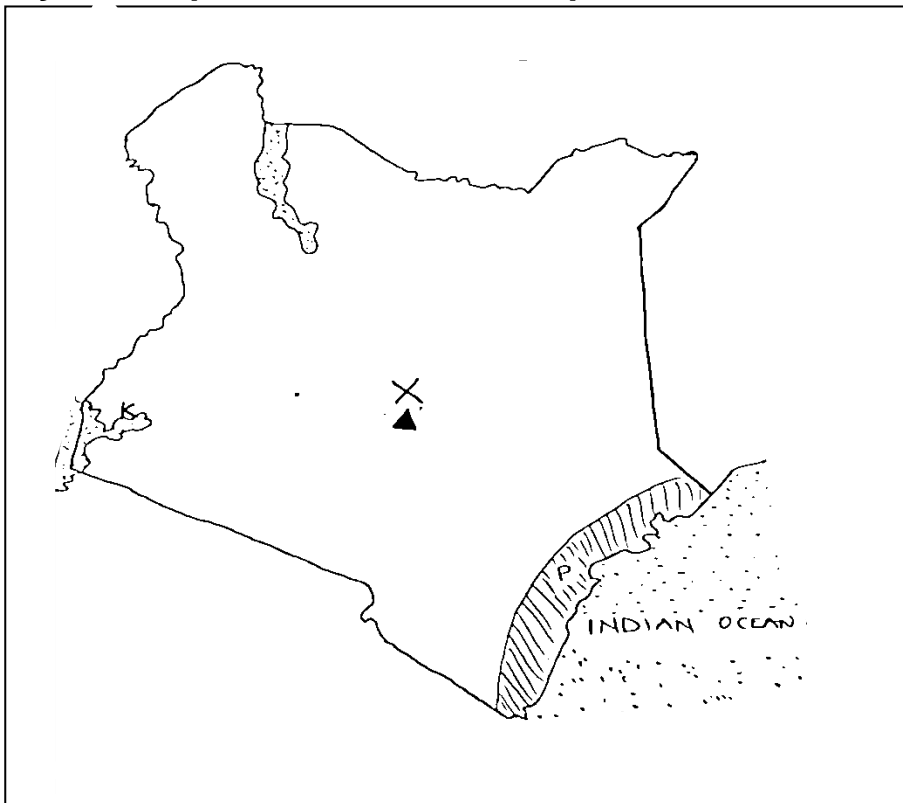
- b) Mention any three factors that can cause population to increase in a country.
i) _____
ii) _____
iii) _____
48. a) Name the first Portuguese explorer to reach the coast of East Africa.

- b) State the use of a compass to a sailor.

- c) Give one reason why the Portuguese explorers wanted to find a sea route to India.

- d) State any one reason why the Portuguese were interested in the coast of East Africa.

49. **Study the map below and answer questions that follow.**



a) Name the water body marked K.

b) Give any one reason why area marked X receives relief rainfall.

c) Name the vegetation type in area marked P.

d) Name the tourist attraction found in area marked P.

50. a) Name the ministry to which the Independent Electoral Commission of Uganda belongs.

b) State any two duties of the Independent Electoral Commission of Uganda.

i) _____

ii) _____

c) Mention any one election malpractice during elections.

For question 51-55 answer either Christianity or Islam but not both

51. **Either:**

a) Give any two ways God treated man in a special way during the creation.

i) _____

ii) _____

b) How did Adam and Eve bring suffering?

c) What lesson do Christians learn from the story of Adam and Eve?

Or:

a) Give any two ways Allah treated Adam in a special way.

i) _____

ii) _____

b) How did Adam and Hawa bring suffering?

c) What lesson do Moslems learn from the story of Adam and Hawa?

52. **Either:**

a) What is marriage?

b) When is a Christian who had ever married in the church allowed to re-marry?

c) Which sacrament unites a man and a woman as a husband and wife?

d) Why do people marry?

Or:

a) What is Nikkah?

b) Mention any two conditions one must fulfill before Nikkah is carried out.

i) _____

ii) _____

c) Give any one condition under which Divorce (Talaq) is done in Islam.

53. **Either:**

a) Why did Jesus accept to be baptized and yet he was a son of God?

b) Give any two unusual things that happened after the baptism of Jesus Christ.

i) _____

ii) _____

c) What happens to a person when he/ she is baptized?

Or:

a) Which pillar initiates one to Islam?

b) Apart from the pillar named in (a) above, mention any other two pillars of Islam.

i) _____

ii) _____

c) Why should a good Moslem observe the above pillars?

54. **Either:** "Eloi Eloi Lema Sabachthani" Mathew 27:46-47)

a) Who said the above words?

b) What is the meaning of the stated words in (54.a) above?

c) State any two things which happened immediately after the death of the above mentioned person in (54.a).

i) _____

ii) _____

Or: “He will admit his mercy to whom he will and for the wrong doers he has prepared a painful torment”. (Surat Insan 76.31)

a) Who said the above words?

b) What is the meaning of the stated words above?

c) State any two things which happened immediately after the death of prophet Muhammad(PBUH).

i) _____

ii) _____

55. **Either:**

a) Write UJCC in full.

b) State any two roles of UJCC.

i) _____

ii) _____

c) Give any one challenge facing UJCC.

Or:

a) Write UMSC in full.

b) State any two roles of UMSC.

i) _____

ii) _____

c) State any one challenge of UMSC.

END